

中文姓名: _____

9(26)-2

英文姓名: _____

成績 : _____

(1) read plus or minus sign first. (2) do your addition or subtraction problems.

$$\begin{array}{r} \square \\ 3 \square \\ - \quad 5 \\ \hline \square 0 \end{array}$$

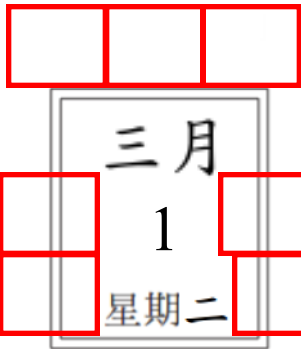
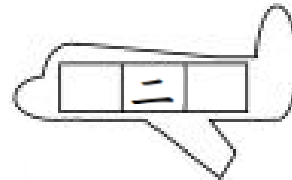
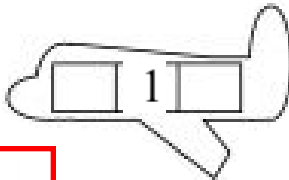
$$\begin{array}{r} \square \\ + \quad 5 \\ 2 \square \\ \hline \square 6 \end{array}$$

□	□
3 0	1 7
+ 2 5	+ 1 4

□	□
4 3	1 2
+ 2 9	+ 1 1

Please write down before and after numbers:

For calendar question: before number is yesterday's date & after number is tomorrow's date.



1.Q: 今天是几月几号/日?

1.A: _____

1.Q: 今天星期几?

1.A: _____

2.Q: 明天是几月几号/日?

2.A: _____

2.Q: 明天星期几?

2.A: _____

3.Q: 昨天是几月几号/日?

3.A: _____

3.Q: 昨天星期几?

3.A: _____

Q: What is the date today?

A: _____

Q: What is the day of the week today?

A: _____

Q: What is the date tomorrow?

A: _____

Q: What is the day of the week tomorrow?

A: _____

Q: What was the date yesterday?

A: _____

Q: What was the day of the week yesterday?

A: _____

- 1. 今天是三月一日。
- 1. 今天是星期二。
- 2. 明天是三月二日。
- 2. 明天是星期三。
- 3. 昨天是二月二十八日。
- 3. 昨天是星期一。