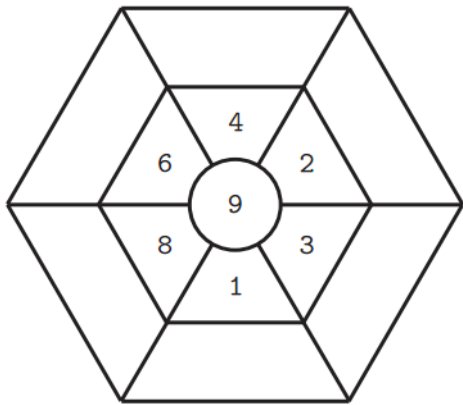


英文姓名: _____

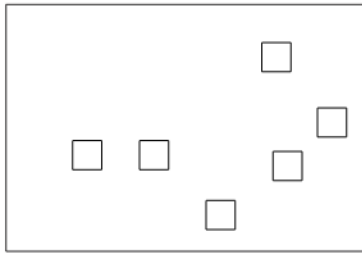
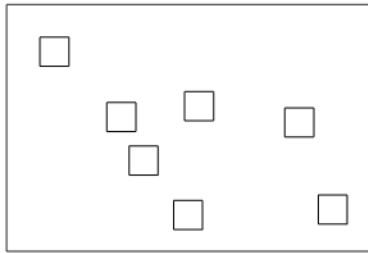
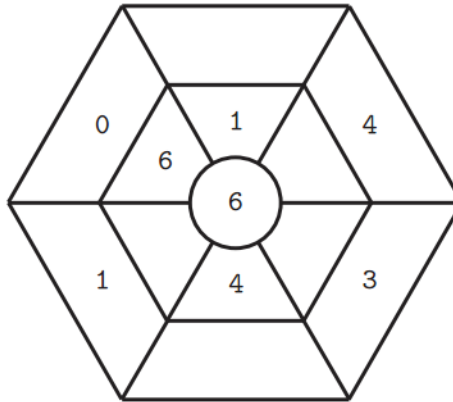
成績: _____

(1) Read plus or minus sign first. (2) Do your addition or subtraction problems.

(+)



(-)



(a) $7 + 6 = (\quad)$

(c) $13 - 7 = (\quad)$

(b) $6 + 7 = (\quad)$

(d) $13 - 6 = (\quad)$

	6		1
-	5	+	9