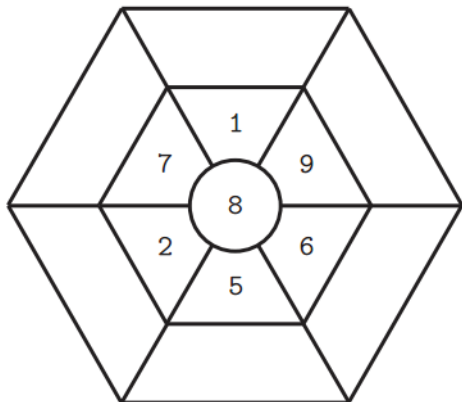


英文姓名： _____

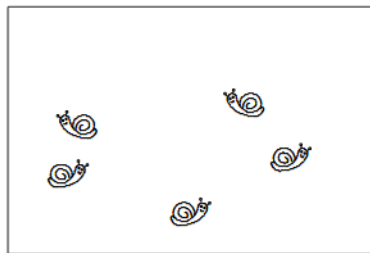
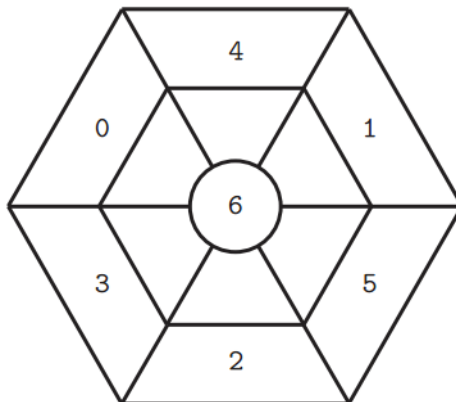
成績： _____

(1) Read plus or minus sign first. (2) Do your addition or subtraction problems.

(+)



(-)



(a) $5 + 2 = (\quad)$

(c) $7 - 5 = (\quad)$

(b) $2 + 5 = (\quad)$

(d) $7 - 2 = (\quad)$

	3		6
+	3	-	4