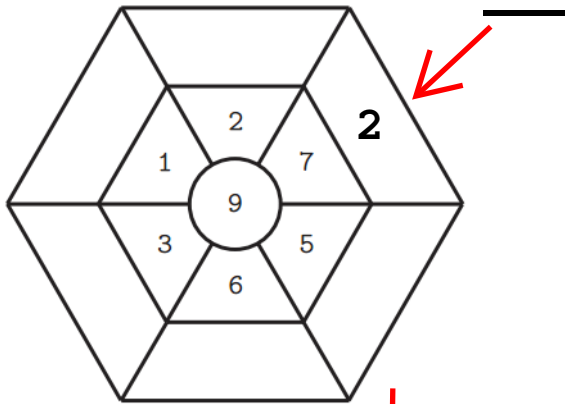
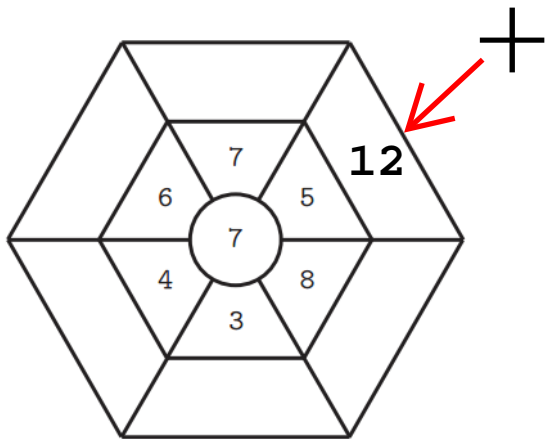


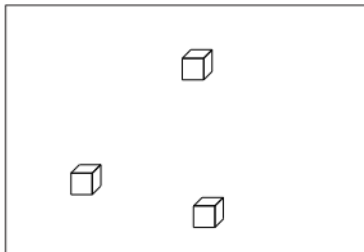
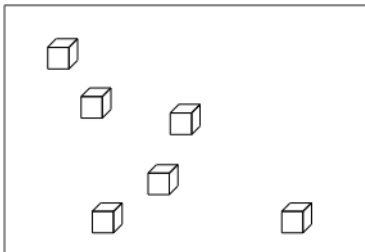
英文姓名: _____

成績 : _____

(1) Read plus or minus sign first. (2) Do your addition or subtraction problems.



	5	5	8	7
→ -	1	+ 4	- 5	+ 2



(a) $6 + 3 = (\quad)$

(c) $9 - 6 = (\quad)$

(b) $3 + 6 = (\quad)$

(d) $9 - 3 = (\quad)$