

中文姓名: _____

18(35)-1

英文姓名: _____

成績 : _____

6 9	2 2
- 3 1	+ 3 2

1 0	1 5
- 7	- 3
- 2	- 1 0

1 0	1 5
+ 1 5	+ 1 1
+ 1 5	+ 5

有几个“等分”? (等分 = 一样大)

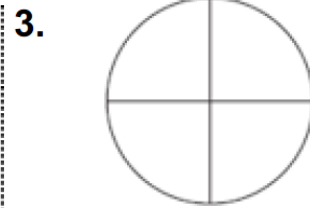
Please write down how many “equal” area shapes there are.




_____ 个相等的部份



_____ 0 _____ 个相等的部份



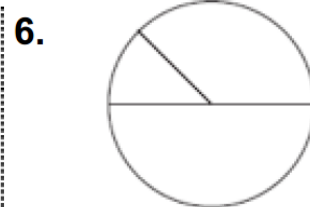
_____ 个相等的部份



_____ 个相等的部份



_____ 个相等的部份



_____ 个相等的部份