

中文姓名: _____

17(34)-5

英文姓名: _____

成績 : _____

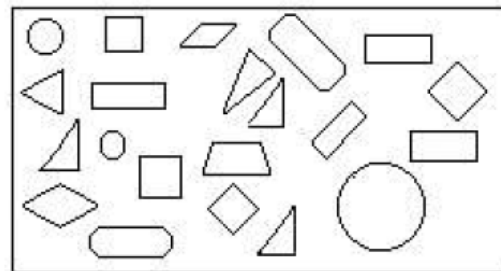

4 5	1 5
- 1 4	+ 4 3

8	8
+ 1 8	+ 2
+ 1 2	+ 9

1 5	1 3
- 6	- 2
- 3	- 6

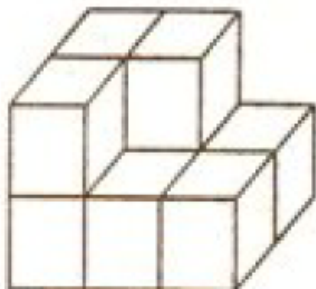
Count the amount of 2D shapes (e.g. circle, square, triangle, etc) and then fill the numbers inside the parenthesis.

○有()个
 □有()个
 △有()个
 ◻有()个



□ 有 () 个
 ◻ 有 () 个
 △ 有 () 个
 ○ 有 () 个

Count the number of cubes.



() 个

For each row, count the number of missing block. Write the numbers down from those 4 rows and then add them.



() + () + () + () = () 个