

中文姓名: \_\_\_\_\_

14(31)-2

英文姓名: \_\_\_\_\_

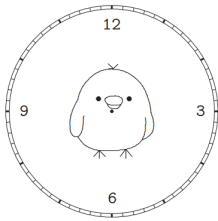
成績: \_\_\_\_\_

$$\begin{array}{r} \square 9 \\ + 3 9 \\ \hline 1 1 \square \end{array} \quad \begin{array}{r} 2 \square \\ - \square 6 \\ \hline 1 1 \end{array}$$

1 7	2 0
- 1 6	+ 7

1. Please draw the clock hands:

1. 画时针跟分针:

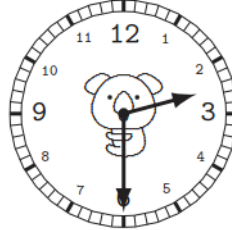


三点三十分。

03 : 30.

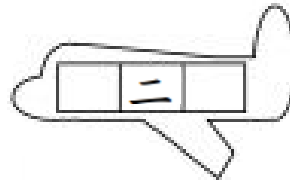
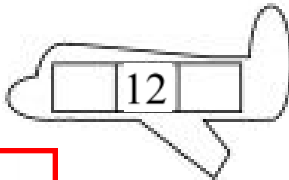
2. Please write down what time it is:

2. 这是几点?



Please write down before and after numbers:

For calendar question: before number is yesterday's date & after number is tomorrow's date.



1.Q: 今天是几月几号/日?

1.A: 今天是

1.Q: 今天星期几?

1.A: 今天是星期

2.Q: 明天是几月几号/日?

2.A: 明天是

2.Q: 明天星期几?

2.A: 明天是星期

3.Q: 昨天是几月几号/日?

3.A: 昨天是

3.Q: 昨天星期几?

3.A: 昨天是星期

Q: What is the date today?

A: \_\_\_\_\_

Q: What is the day of the week today?

A: \_\_\_\_\_

Q: What is the date tomorrow?

A: \_\_\_\_\_

Q: What is the day of the week tomorrow?

A: \_\_\_\_\_

Q: What was the date yesterday?

A: \_\_\_\_\_

Q: What was the day of the week yesterday?

A: \_\_\_\_\_

1. 今天是(四月十二日)

1. 今天是星期(二)

2. 明天是(四月十三日)

2. 明天是星期(三)

3. 昨天是(四月十一日)

3. 昨天是星期(一)