

中文姓名: _____

14(31)-1

英文姓名: _____

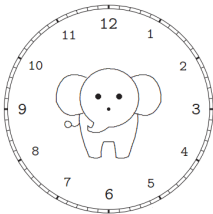
成績: _____

$$\begin{array}{r} \square \ 1 \\ + \quad \square \\ \hline 2 \ 8 \end{array} \quad \begin{array}{r} 2 \ 7 \\ - \quad \square \\ \hline \square \ 6 \end{array}$$

8	9
+ 9	+ 1 1

1. Please draw the clock hands:

1. 画时针跟分针:




五点 三十分。

05 : 30.

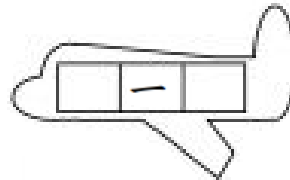
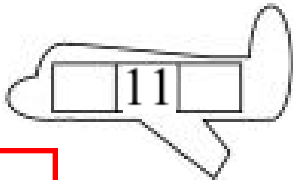
2. Please write down what time it is:

2. 这是几点?



Please write down before and after numbers:

For calendar question: before number is yesterday's date & after number is tomorrow's date.



1.Q: 今天是几月几号/日?

1.A: 今天是 _____

1.Q: 今天星期几?

1.A: 今天是星期 _____

2.Q: 明天是几月几号/日?

2.A: 明天是 _____

2.Q: 明天星期几?

2.A: 明天是星期 _____

Q: What is the date today?

A: _____

Q: What is the day of the week today?

A: _____

Q: What is the date tomorrow?

A: _____

Q: What is the day of the week tomorrow?

A: _____

Q: What was the date yesterday?

A: _____

Q: What was the day of the week yesterday?

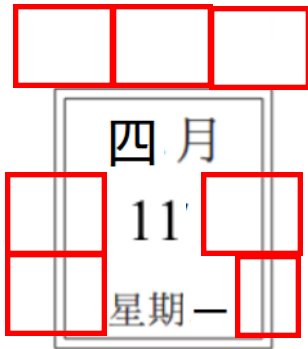
A: _____

3.Q: 昨天是几月几号/日?

3.A: 昨天是 _____

3.Q: 昨天星期几?

3.A: 昨天是星期 _____



- 1. 今天是(四月十一日)
- 1. 今天是星期(一)
- 2. 明天是(四月十二日)
- 2. 明天是星期(二)
- 3. 昨天是(四月十日)
- 3. 昨天是星期日/星期(天)

3.Q: 昨天是几月几号/日?

3.A: 昨天是 _____

3.Q: 昨天星期几?

3.A: 昨天是星期 _____