

中文姓名: _____

13(30)-4

英文姓名: _____

成績 : _____

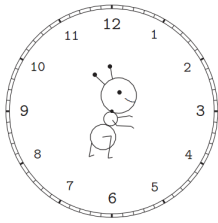
$$\begin{array}{r} 6 \square \\ - 7 \\ \hline 61 \end{array}$$

$$\begin{array}{r} 67 \\ - \square \\ \hline \square 0 \end{array}$$

20	6
- 15	+ 4

1. Please draw the clock hands:

1. 画时针跟分针:

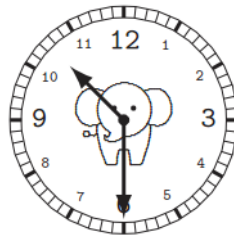


十一点三十分。

11 : 30.

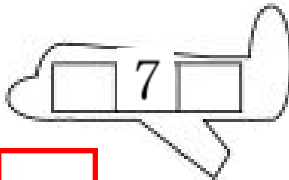
2. Please write down what time it is:

2. 这是几点?



Please write down before and after numbers:

For calendar question: before number is yesterday's date & after number is tomorrow's date.



--	--	--

.Q: 今天是几月几号/日?

1.A: 今天是

1.Q: 今天星期几?

1.A: _____

2.Q: 明天是几月几号/日?

2.A: _____

2.Q: 明天星期几?

2.A: _____

3.Q: 昨天是几月几号/日?

3.A: _____

3.Q: 昨天星期几?

3.A: _____

Q: What is the date today?

A: _____

Q: What is the day of the week today?

A: _____

Q: What is the date tomorrow?

A: _____

Q: What is the day of the week tomorrow?

A: _____

Q: What was the date yesterday?

A: _____

Q: What was the day of the week yesterday?

A: _____

四月

7

星期四

1. 今天是(四月七日)

1. 今天是星期(四)

2. 明天是(四月八日)

2. 明天是星期(五)

3. 昨天是(四月六日)

3. 昨天是星期(三)