

中文姓名: _____

13(30)-3

英文姓名: _____

成績: _____

$$\begin{array}{r} 7 \square \\ - \square 1 \\ \hline 3 2 \end{array}$$

$$\begin{array}{r} \square \\ + 5 3 \\ \hline \square 1 \end{array}$$

1 8	3
- 1 1	+ 1 1

1. Please draw the clock hands:

1. 画时针跟分针:

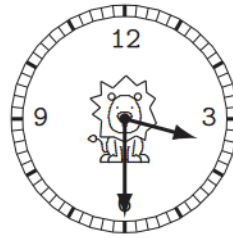


四点三十分。

04:30.

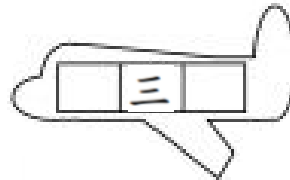
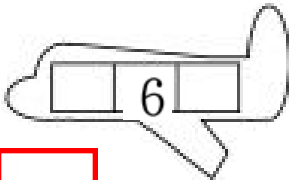
2. Please write down what time it is:

2. 这是几点?



Please write down before and after numbers:

For calendar question: before number is yesterday's date & after number is tomorrow's date.



--	--	--

.Q: 今天是几月几号/日?

1.A: 今天是 _____

1.Q: 今天星期几?

1.A: _____

2.Q: 明天是几月几号/日?

2.A: _____

2.Q: 明天星期几?

2.A: _____

3.Q: 昨天是几月几号/日?

3.A: _____

3.Q: 昨天星期几?

3.A: _____

Q: What is the date today?

A: _____

Q: What is the day of the week today?

A: _____

Q: What is the date tomorrow?

A: _____

Q: What is the day of the week tomorrow?

A: _____

Q: What was the date yesterday?

A: _____

Q: What was the day of the week yesterday?

A: _____

1. 今天是(四月六日)

1. 今天是星期(三)

2. 明天是(四月七日)

2. 明天是星期(四)

3. 昨天是(四月五日)

3. 昨天是星期(二)

