

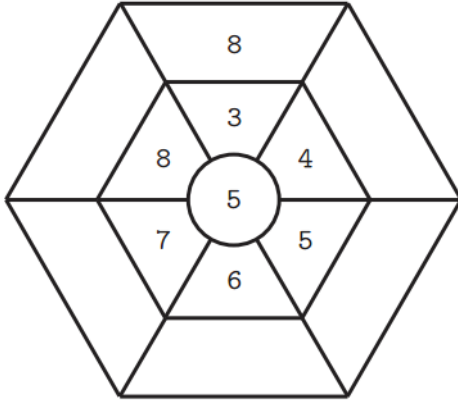
英文姓名: _____

成績: _____



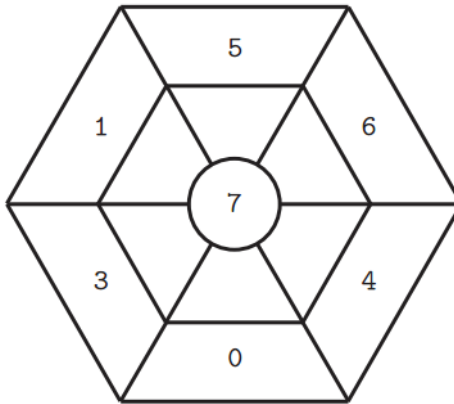
Fill in the blanks:

填入正确数字:

(+)



(-)



(a) $4 + 8 = (\quad)$

(c) $12 - 4 = (\quad)$

(b) $8 + 4 = (\quad)$

(d) $12 - 8 = (\quad)$

| | |
|-----|-----|
| 37 | 59 |
| - 6 | - 8 |
| | |

| | |
|------|------|
| 60 | 61 |
| + 31 | + 18 |
| | |